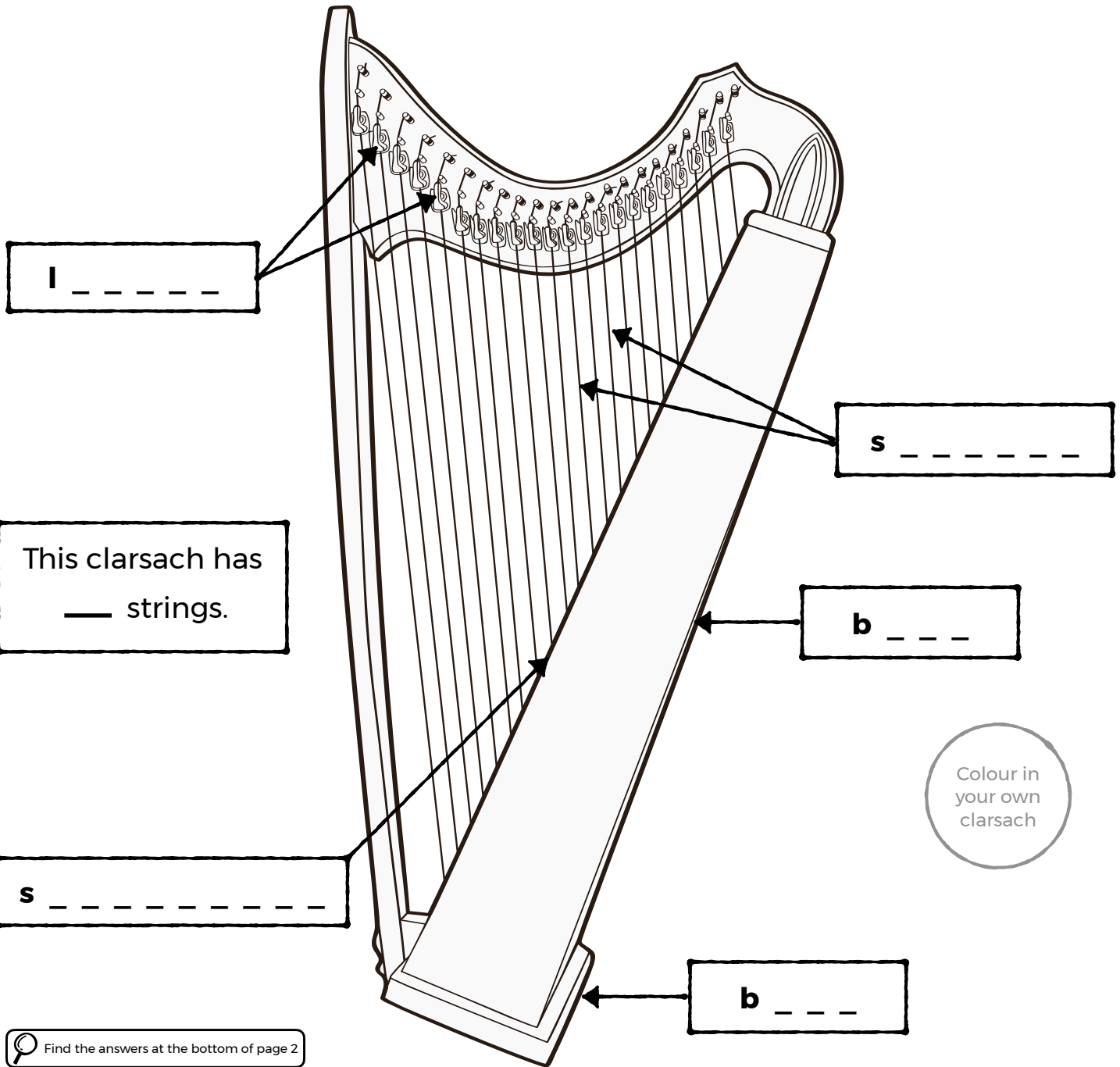



# Clàrsach // Harp

This instrument is called the **clàrsach**.


How many parts can you name?



Find the answers at the bottom of page 2



## • Learn your Gaelic •




<b>'S math sin!</b>	<i>smah-shin</i>	<b>Great!</b>
---------------------	------------------	---------------

# Clàrsach // Harp

## Video 1: Heaval

[Watch video](#)



## Video 2: Heisk

[Watch video](#)



### Watch both videos then answer the following questions:

- In the first video, the musician changes the levers as she is playing the tune. What does this do to the notes being played?

- Describe each video using only word:

**Video 1:**

**Video 2:**

- What other instruments can you hear in the second video?

**1. a** \_ \_ \_ \_ \_ **2. d** \_ \_ \_ \_

**3. f** \_ \_ \_ \_ \_ **4. k** \_ \_ \_ \_ \_